

Please write clearly in block capitals.

Centre number

--	--	--	--	--

Candidate number

--	--	--	--

Surname

Forename(s)

Candidate signature

GCSE MATHEMATICS

F

Foundation Tier Paper 2 Calculator

Thursday 8 June 2017


Morning

Time allowed: 1 hour 30 minutes

Materials

For this paper you must have:

- a calculator
- mathematical instruments.



Instructions

- Use black ink or black ball-point pen. Draw diagrams in pencil.
- Answer **all** questions.
- You must answer the questions in the spaces provided. Do not write outside the box around each page or on blank pages.
- Do all rough work in this book. Cross through any work you do not want to be marked.

Information

- The marks for questions are shown in brackets.
- The maximum mark for this paper is 80.
- You may ask for more answer paper, graph paper and tracing paper. These must be tagged securely to this answer book.

Advice

- In all calculations, show clearly how you work out your answer.

For Examiner's Use	
Pages	Mark
2–3	
4–5	
6–7	
8–9	
10–11	
12–13	
14–15	
16–17	
18–19	
20–21	
22–23	
24–25	
26	
TOTAL	



J U N 1 7 8 3 0 0 2 F 0 1

Answer **all** questions in the spaces provided

- 1** Which unit is most suitable for measuring the length of a tennis court?
Circle your answer.

[1 mark]

kilometres

metres

centimetres

millimetres

- 2** Circle the multiple of both 8 and 12

[1 mark]

4

32

72

108

- 3** What is $\frac{3}{2}$ as a decimal?
Circle your answer.

[1 mark]

1.05

1.1

1.5

3.2



4 Circle the correct statement.

[1 mark]

$-4 < -3$

$1 \leq -2$

$-6 > 5$

$-1 \geq 0$

5 (a) Use your calculator to work out $\sqrt{701}$ as a decimal.

Write down your full calculator display.

[1 mark]

Answer _____

5 (b) Give your answer to part (a) to 1 decimal place.

[1 mark]


Answer _____








Turn over for the next question

Turn over ►



- 6** A swimming pool has three changing rooms, Male, Female and Family.
The pictogram shows the number of people using each changing room during one hour.

Key:  represents _____ people

Male	 
Female	   
Family	

8 people used the Male changing room.

- 6 (a)** Complete the key.

[1 mark]

- 6 (b)** How many people used the Female changing room?

[1 mark]

Answer _____



6 (c) The manager has bought lockers for the changing rooms.

Why should she **not** use these results to decide where to put them?

[1 mark]

7 Here is a list of numbers.

21 17 23 21 29 32 21 25 36

Work out the median.

[2 marks]

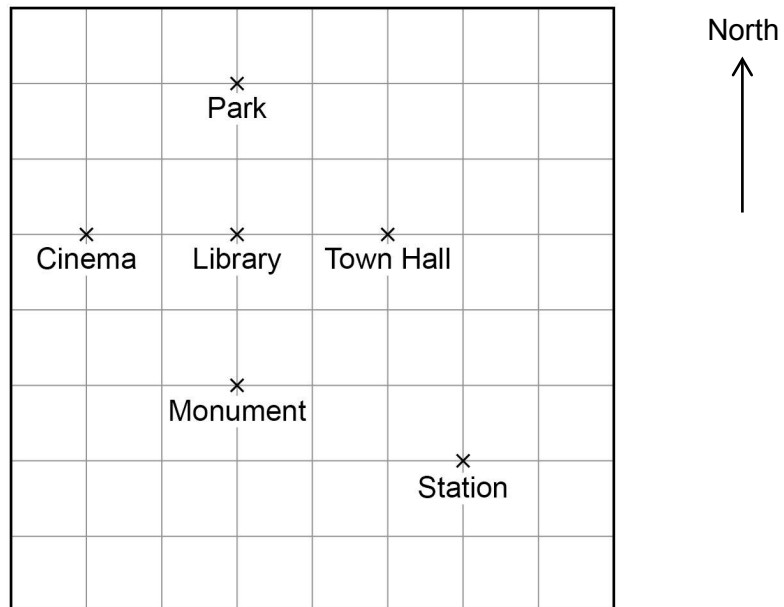
Answer _____

Turn over for the next question



8 Here is a map of a town.

Scale: 1 cm represents 200 m



8 (a) Which place is exactly North West of the Station?
Circle your answer.

[1 mark]

Cinema Town Hall Library Park Monument

8 (b) Circle the three-figure bearing of the Monument from the Park.

[1 mark]

090° 180° 270° 360°



8 (c) What is the distance, in metres, from the Cinema to the Station?

[3 marks]

Answer _____ metres

8 (d) Why might the shortest **walking** distance from the Cinema to the Station be greater than your answer to part (c)?

[1 mark]

Turn over for the next question

Turn over ►



9 Complete the bank statement.

[2 marks]

Date	Description	Credit (£)	Debit (£)	Balance (£)
13/12/2016	Starting balance			212.48
14/12/2016	Council tax		128.39	_____
15/12/2016	Salary	856.21		_____



10

The average age of teachers at a school is 36 years.

Mr Smith's age is $\frac{11}{9}$ of the average.

How old is Mr Smith?

[2 marks]

Answer _____ years

11

Solve $4x - 3 = 14$

[2 marks]

$x =$ _____

Turn over for the next question

Turn over ►

12

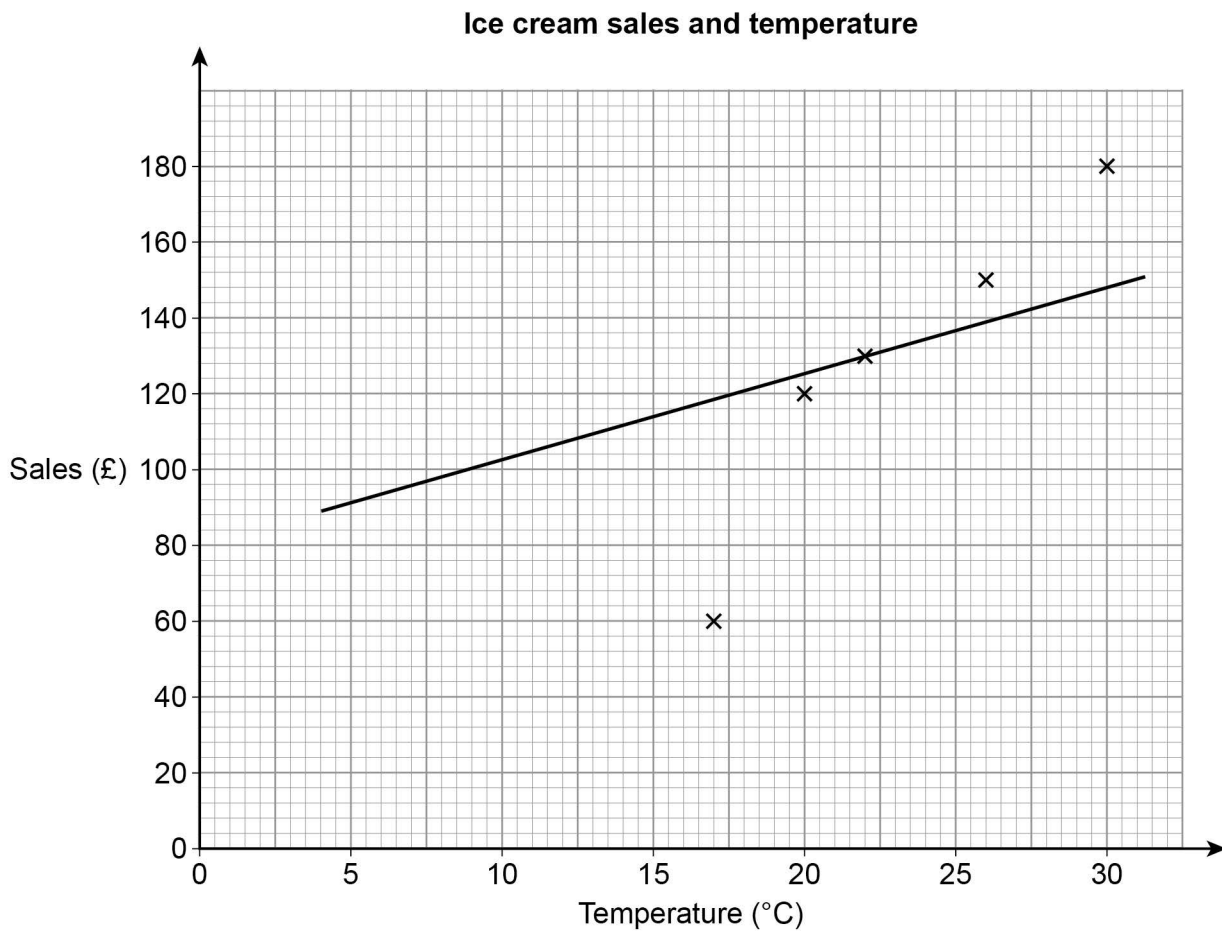
Lee sells ice creams.

The table shows the midday temperature and his sales for five days.

	Day 1	Day 2	Day 3	Day 4	Day 5
Temperature ($^{\circ}\text{C}$)	30	26	17	22	20
Sales (£)	180	150	80	130	120

12 (a)

He draws this scatter graph and line of best fit.

Write down **two** mistakes he has made.**[2 marks]**

Mistake 1

Mistake 2



12 (b) Lee wants to work out the range of the five temperatures.

His calculation is $30 - 20 = 10$

Is his method correct?

Tick a box.

[1 mark]

Yes

☐

No

☐

Give a reason to support your answer.

12 (c) The table shows Lee's costs.

Ingredients	15% of sales
Fuel	£7 per day

Work out his total profit for the five days.

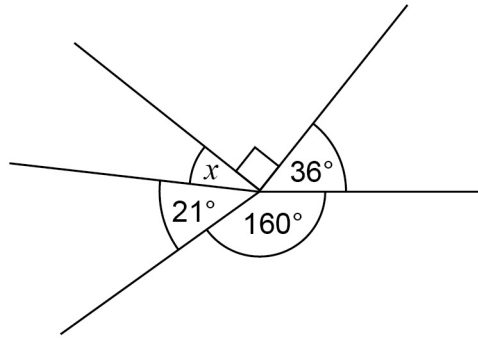
[5 marks]

Answer £ _____

Turn over ►



13

Not drawn
accuratelyWork out the size of angle x .**[2 marks]**

Answer _____ degrees



14 In this question, use

1 kilogram = 2.2 pounds

1 stone = 14 pounds

Change 70 kilograms into stones.

[3 marks]

Answer _____ stones

15 Here are some numbers.

10 13 15 20 27 39

10 15 20 is an arithmetic progression.

Use **three** of the numbers to make a different arithmetic progression.

Describe the rule.

[2 marks]

Answer _____

Rule _____

Turn over ►



16 The counters in a bag are red or blue.

One fifth of the counters are red.

Work out the ratio red counters : blue counters

Circle your answer.

[1 mark]

1 : 4

1 : 5

4 : 5

1 : 6

17 Circle the fraction equal to 0.1%

[1 mark]

$\frac{1}{10}$

$\frac{1}{100}$

$\frac{1}{1000}$

$\frac{1}{10\,000}$



Ellen works for a company that sells cars.

- a salary of £1470
- 28% of the total **profit** the company makes from her sales
- a £250 bonus **if** she sells at least 15 cars.

Total cost to the company	Total income for the company	Number of months when she sold at least 15 cars
£464 500	£538 000	3

You **must** show your working.

[illegible]

8



19 Ben and Katy throw darts at a target.

Ben's ratio of hits to misses is 5 : 1

Katy's ratio of hits to misses is 3 : 1

Ben says,

"5 is bigger than 3, so I must have more hits than Katy."

Give an example to show that this might **not** be true.

[2 marks]



- 20** A code has 4 digits.
Each digit is a number from 0 to 9
Digits may be repeated.

The code starts 5 4 1

5	4	1	
---	---	---	--

- 20 (a)** Joe chooses a number at random for the last digit.
Write down the probability that he chooses the correct number.

[1 mark]

Answer _____

- 20 (b)** Amy knows the last digit is odd but **not** 7
She chooses a different odd number at random.
What is the probability that she chooses the correct number?

[1 mark]

Answer _____

Turn over for the next question

Turn over ►



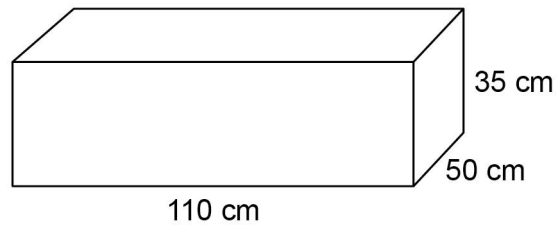
- 21** Eva thinks she can save water by having a shower instead of a bath.

Eva's shower

uses 10.8 litres per minute

lasts for 8 minutes.

Eva assumes that the water in her bath is in the shape of this cuboid.



$$1000 \text{ cm}^3 = 1 \text{ litre}$$

- 21 (a)** Using Eva's assumption, work out how many litres of water she saves by having a shower instead of a bath.

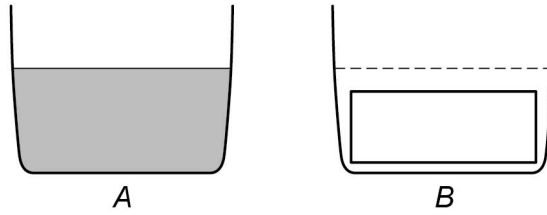
[5 marks]

Answer _____ litres



- 21 (b)** *A* shows the water level before Eva gets into the bath.
B shows the cuboid in the empty bath.

Not drawn
accurately



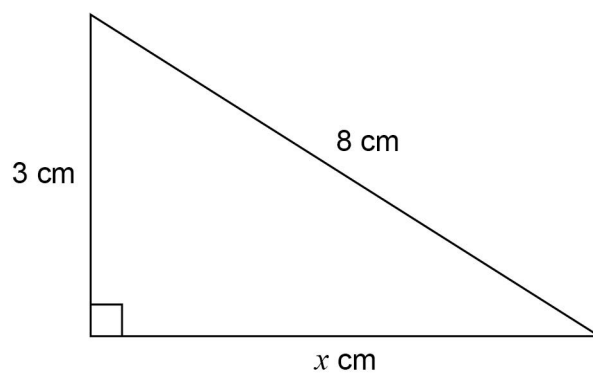
What does this tell you about the amount of water saved?

[1 mark]

Turn over for the next question



22

Not drawn
accuratelyWork out the value of x as a decimal.**[3 marks]**

Answer _____



23

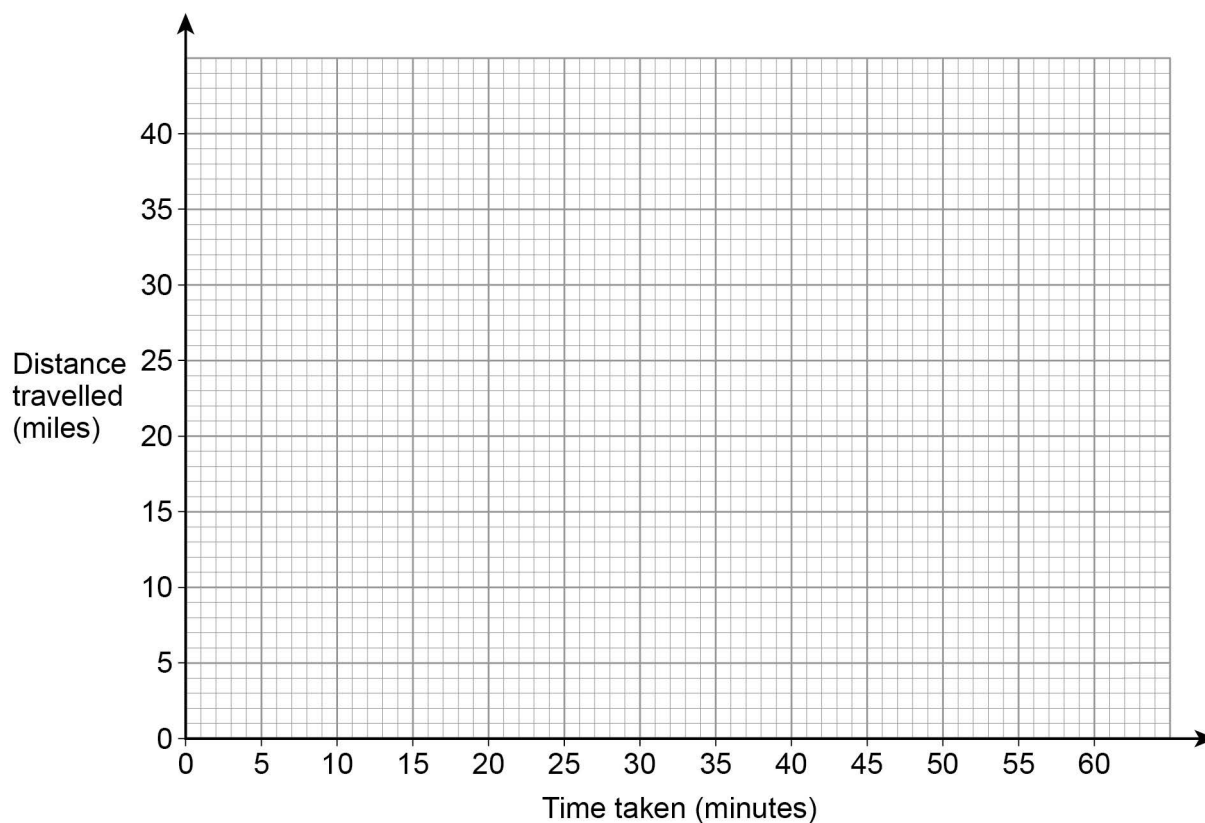
Lily goes on a car journey.

For the first 30 minutes her average speed is 40 miles per hour.

She then stops for 15 minutes.

She then completes the journey at an average speed of 60 miles per hour.

The total journey time is 1 hour.

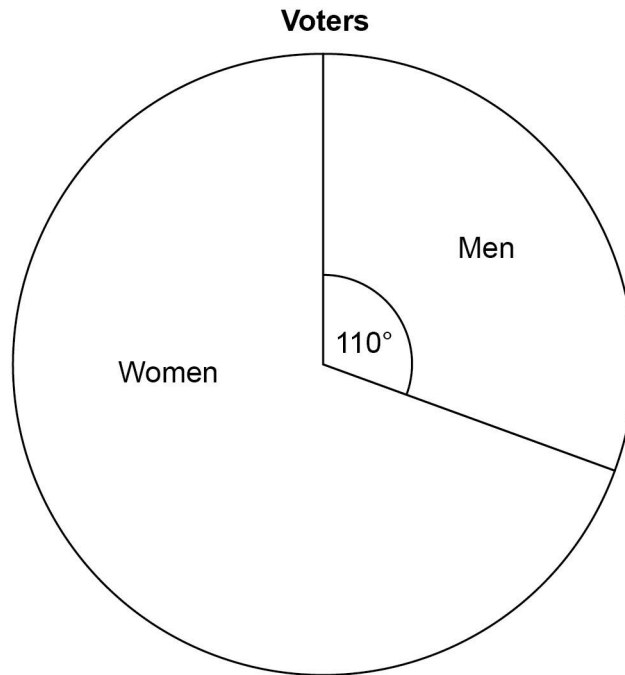
23 (a) Draw a distance-time graph for her journey.**[3 marks]****23 (b)** Write down the average speed for the total journey.**[1 mark]**

Answer _____ mph

Turn over for the next question**Turn over ►**

24

The pie chart shows information about voters in an election.



3360 **more** women voted than men.

Work out the total number of voters.

[3 marks]

Answer _____



25

The table shows information about some CDs.

Type	Rock	Pop	Jazz
Number of CDs	2	x	$2x + 5$

A CD is chosen at random.

The probability it is **rock** is $\frac{1}{20}$

Work out the probability it is jazz.

[4 marks]

Answer _____

Turn over for the next question**Turn over ►**

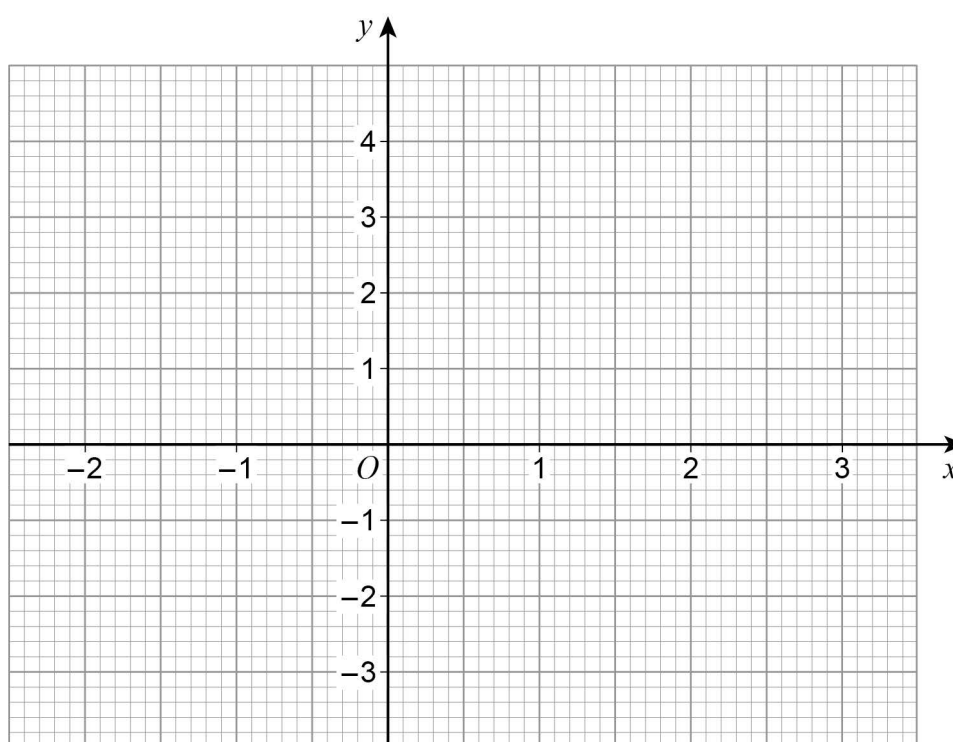
26 (a) Complete the table of values for $y = x^2 - x - 2$

[2 marks]

x	-2	-1	0	1	2	3
y			-2	-2		4

26 (b) Draw the graph of $y = x^2 - x - 2$ for values of x from -2 to 3

[2 marks]



27 Write these numbers in **descending** order.

9563

 9.56×10^3 9.56×3^{10} **[2 marks]**

Answer _____ , _____ , _____

28 Rearrange $y = \frac{x}{3} + 9$ to make x the subject.

[2 marks]

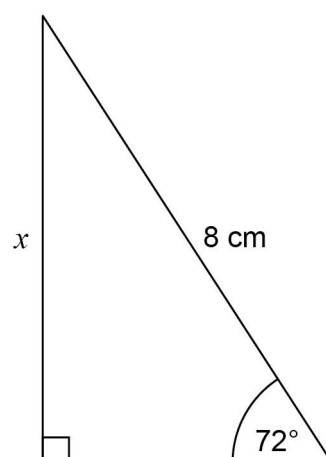
Answer _____

Turn over for the next question

Turn over ►



29

Use trigonometry to work out the length x .Not drawn
accurately**[2 marks]**

Answer _____ cm

END OF QUESTIONS

There are no questions printed on this page

**DO NOT WRITE ON THIS PAGE
ANSWER IN THE SPACES PROVIDED**



There are no questions printed on this page

**DO NOT WRITE ON THIS PAGE
ANSWER IN THE SPACES PROVIDED**

Copyright Information

For confidentiality purposes, from the November 2015 examination series, acknowledgements of third party copyright material will be published in a separate booklet rather than including them on the examination paper or support materials. This booklet is published after each examination series and is available for free download from www.aqa.org.uk after the live examination series.

Permission to reproduce all copyright material has been applied for. In some cases, efforts to contact copyright-holders may have been unsuccessful and AQA will be happy to rectify any omissions of acknowledgements. If you have any queries please contact the Copyright Team, AQA, Stag Hill House, Guildford, GU2 7XJ.

Copyright © 2017 AQA and its licensors. All rights reserved.

