

Please write clearly in block capitals.

Centre number

--	--	--	--	--

Candidate number

--	--	--	--

Surname

Forename(s)

Candidate signature

I declare this is my own work.

GCSE MATHEMATICS

F


Foundation Tier Paper 2 Calculator

Thursday 3 November 2022 Morning Time allowed: 1 hour 30 minutes

Materials

For this paper you must have:

- a calculator
- mathematical instruments
- the Formulae Sheet (enclosed).



Instructions

- Use black ink or black ball-point pen. Draw diagrams in pencil.
- Fill in the boxes at the top of this page.
- Answer **all** questions.
- You must answer the questions in the spaces provided. Do not write outside the box around each page or on blank pages.
- If you need extra space for your answer(s), use the lined pages at the end of this book. Write the question number against your answer(s).
- Do all rough work in this book. Cross through any work you do not want to be marked.

Information

- The marks for questions are shown in brackets.
- The maximum mark for this paper is 80.
- You may ask for more answer paper, graph paper and tracing paper. These must be tagged securely to this answer book.

For Examiner's Use	
Pages	Mark
2–3	
4–5	
6–7	
8–9	
10–11	
12–13	
14–15	
16–17	
18–19	
20–21	
22–23	
24–25	
26	
TOTAL	

Advice

In all calculations, show clearly how you work out your answer.



N 0 V 2 2 8 3 0 0 2 F 0 1

Answer **all** questions in the spaces provided.

Do not write
outside the
box

- 1** Circle the number that is a multiple of 25 **[1 mark]**

55

65

75

85

- 2** Circle the value of the digit 3 in the number 10.23 **[1 mark]**

$\frac{3}{1000}$

$\frac{3}{100}$

$\frac{3}{10}$

3

- 3** Circle the lowest of these temperatures. **[1 mark]**

-2.1°C

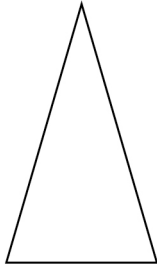


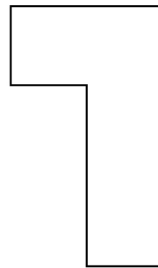
0.4°C

-5°C

1°C



4

Circle the letter of the shape that has **exactly one** line of symmetry.**[1 mark]****P****Q****R****S**

Turn over for the next question



5 (a) Simplify fully $d \times d$

[1 mark]

Answer _____

5 (b) Simplify fully $n \div n$

[1 mark]

Answer _____

5 (c) Simplify fully $\frac{1}{3} \times 6t$

[1 mark]

Answer _____



- 6 (a) Write a number in the box to make the calculation correct.

[1 mark]

$$16 \div \boxed{} = 0.016$$

- 6 (b) Write a number in the box to make the calculation correct.

[1 mark]

$$18.4 + 3.9 + \boxed{} = 27$$

- 6 (c) Write a fraction in the box to make the calculation correct.

[1 mark]

$$\frac{1}{2} \times \boxed{} = \frac{1}{8}$$

- 6 (d) Write the **same** number in both boxes to make the calculation correct.

[1 mark]

$$\boxed{} \times \boxed{} = 361$$

Turn over ►












7 Three groups of people, A, B and C, have taken driving tests.

7 (a) Here is information about the number of tests taken by the people in A.

Group A

Key:  represents 4 people

One test	  
Two tests	   
Three tests	 

Here is information about the number of tests taken by the people in B.

One test Half the number in A who have taken one test.


Two tests 4 fewer than the number in A who have taken two tests.

Three tests 10 more than the number in A who have taken three tests.

Complete this pictogram for the people in B.

[3 marks]

Group B

Key:  represents 4 people

One test	
Two tests	
Three tests	



- 7 (b)** In group C there are 25 people.
17 of these people have passed a test.
One person is picked at random from C.
Work out the probability that the person has **not** passed a test.

[2 marks]

Answer _____

- 8** Work out the value of $3r + 4t$ when $r = 13$ and $t = -2$

[2 marks]

Answer _____

Turn over for the next question**Turn over ►**

9

Hamish has saved 295 coins.

Each one is a 20p coin.

He gives an equal number of 20p coins to each of his 8 grandchildren.

He gives them as many coins as possible.

How much, in £, does he have left?

[4 marks]

Answer £ _____



10 Here are two sets of numbers.

Set A 2 12 13 27

Set B 1 15 16 30

One number from Set A is swapped with one number from Set B.

The total of the numbers in each set is now the same.

Which two numbers are swapped?

[2 marks]

Answer _____ and _____

11 Rearrange $m = p - 5$ to make p the subject.

Circle your answer.

[1 mark]

$$p = \frac{m}{5}$$

$$p = m + 5$$

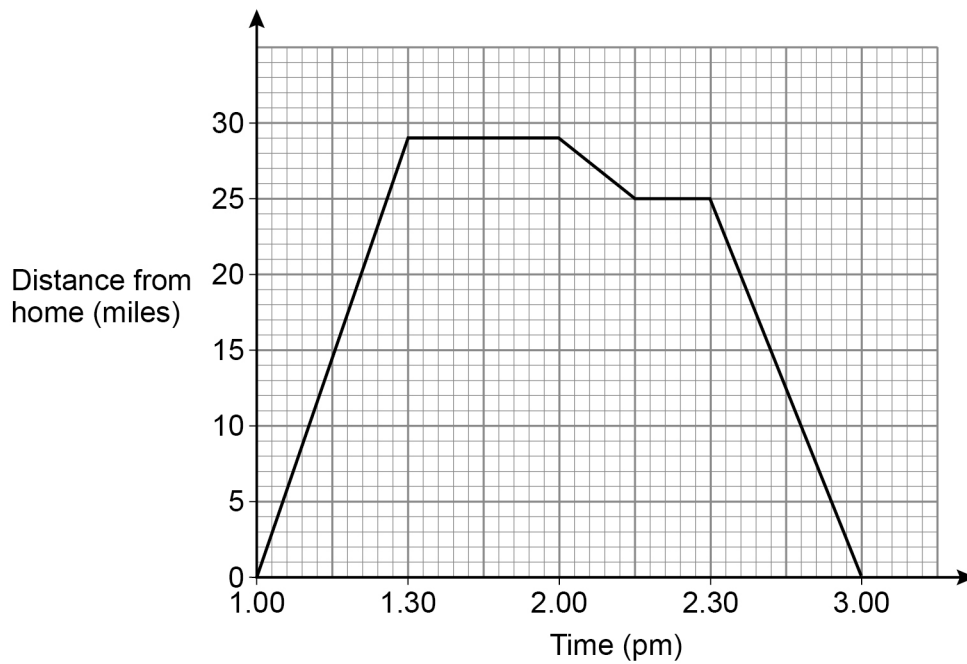
$$p = 5m$$

$$p = m - 5$$



12

Here is the distance-time graph for a car between 1 pm and 3 pm



- 12 (a) Work out the **total** time that the car is **not** moving between 1 pm and 3 pm
State the units of your answer.

[2 marks]

Answer _____

- 12 (b) Work out the **total** distance the car travels between 1 pm and 3 pm

[2 marks]

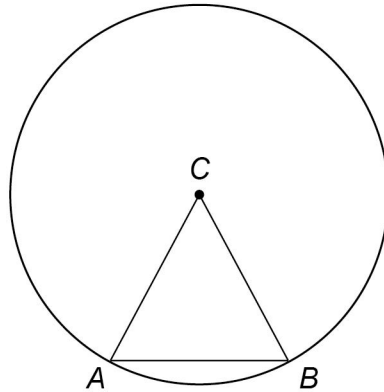
Answer _____ miles



13

A and B are points on a circle.

C is the centre of the circle.



Not drawn
accurately

Tick **one** box for each statement.

[3 marks]

	Definitely true	Might be true	Cannot be true
Line AB is a tangent to the circle	<input type="checkbox"/>	<input type="checkbox"/>	<input type="checkbox"/>
AC is an arc of the circle	<input type="checkbox"/>	<input type="checkbox"/>	<input type="checkbox"/>
Triangle ABC is equilateral	<input type="checkbox"/>	<input type="checkbox"/>	<input type="checkbox"/>

Turn over for the next question

Turn over ►



- 14** To travel to a festival, a group of people will hire a minibus.
This formula has all costs in £

$$\text{Cost per person} = \frac{165 + \text{cost of the minibus}}{\text{number of people in the group}}$$

- 14 (a)** With 12 people in the group, the cost of the minibus will be £567
Work out the cost per person.

[2 marks]

Answer £ _____

- 14 (b)** With 15 people in the group, they will hire a different minibus.
The cost per person will be £50
Work out the cost of this minibus.

[3 marks]

Answer £ _____



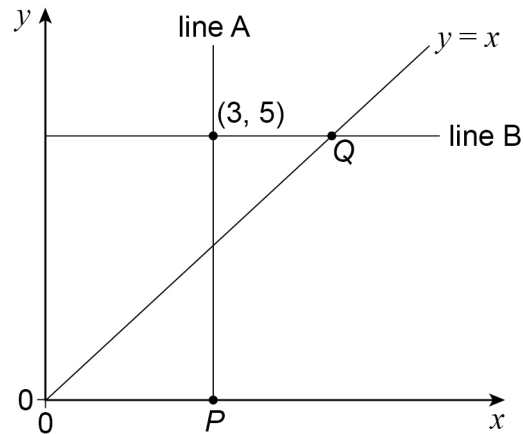
15

The sketch shows

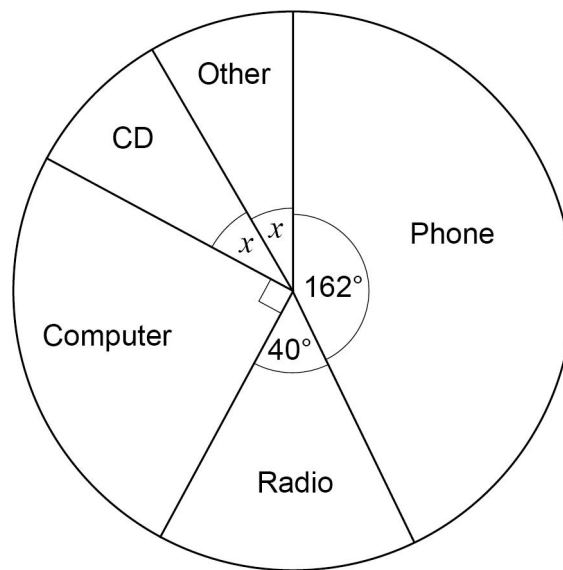
the line $y = x$

line A, which is vertical

line B, which is horizontal.

The point $(3, 5)$ is on both line A and line B.Write down the coordinates of P and Q .**[2 marks]**
 P (_____ , _____) Q (_____ , _____)
Turn over for the next question**Turn over ►**

- 16** Some people were asked for the main way they listen to music.
A pie chart is drawn to represent their answers.



- 16 (a)** Work out the size of angle x .

[2 marks]

Answer _____ degrees



16 (b) 135 people said Computer.

How many people said Phone?

[3 marks]

Answer _____

17 Complete this statement.

[1 mark]

$10^8 =$ _____ million

Turn over for the next question



18 A football team plays two matches.

18 (a) For the first match, 40 000 tickets are sold.

Assume that each ticket costs £38.50

Work out the total amount of money from ticket sales for this match.

[2 marks]

Answer £ _____

18 (b) In fact, for the first match,
some of the tickets cost less than £38.50
and
some of the tickets cost more than £38.50

What does this mean about the total amount of money from ticket sales for this match?

Tick **one** box.

[1 mark]

☐

It will be more than the answer to part (a)

☐

It will be the same as the answer to part (a)

☐

It will be less than the answer to part (a)

☐

It is not possible to tell



18 (c) For the second match, the number of tickets sold increases from 40 000 to 55 000

Is the increase in tickets sold **more** than 35% ?

You **must** show your working.

[3 marks]

19 On a train, there are between 60 and 70 people.

The ratio of adults to children is 5 : 4

Work out the **total** number of people on the train.

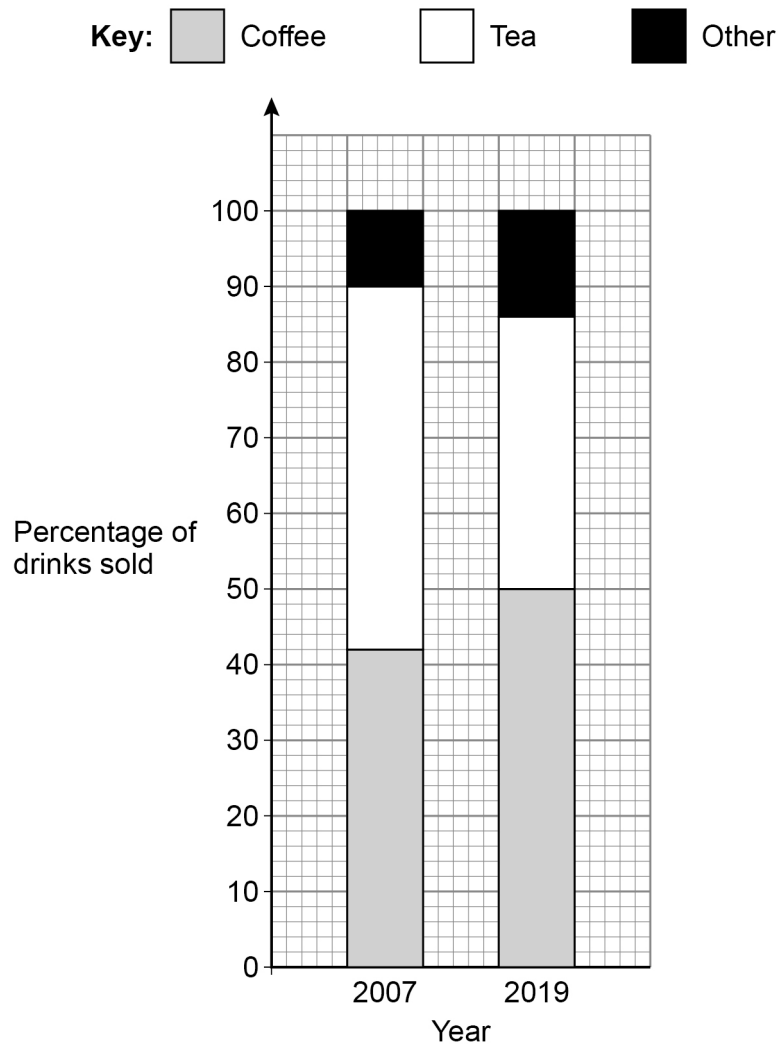
[2 marks]

Answer _____



20

The composite bar chart shows information about the **percentage** of drinks sold by a café in 2007 and 2019



20 (a) In 2007 the café sold a total of 24 000 drinks.

How many **more** teas than coffees were sold?

[2 marks]

Answer _____



20 (b) Were more coffees sold at the café in 2019 than in 2007 ?

Tick a box.

☐

Yes

☐

No

☐

Cannot tell

Give a reason for your answer.

[1 mark]

21 (a) k is a whole number between 40 and 50

The cube root of k is 3, to the nearest whole number.

Work out the **largest** possible value of k .

[2 marks]

Answer _____

21 (b) Fay tries to solve $x^2 = 100$

She says,

“The only possible value of x is 10”

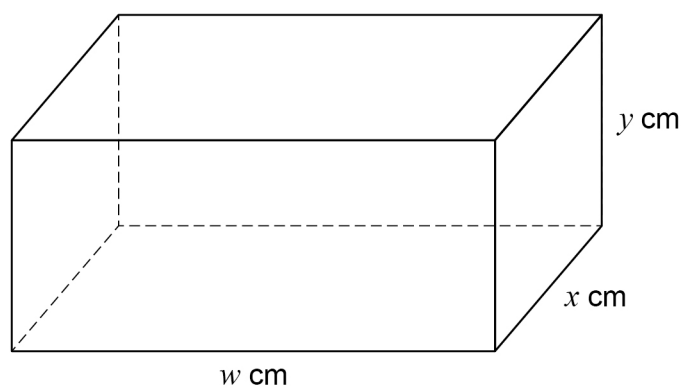
Give a reason why she is **not** correct.

[1 mark]



22 (a) Here is a cuboid.

w , x and y are **different** whole numbers.



The total length of **all** the edges of the cuboid is 80 cm

The volume is **greater** than 200 cm^3

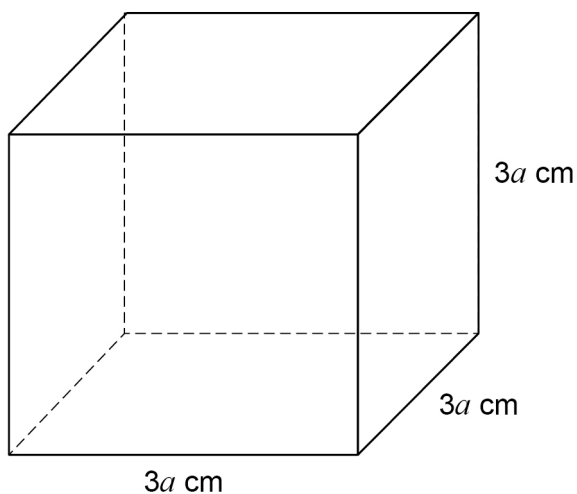
Work out one possible set of values for w , x and y .

[2 marks]

$w =$ _____ $x =$ _____ $y =$ _____



22 (b) Here is a solid cube.



Circle the expression for the **total** surface area in cm^2

[1 mark]

$36a$

$54a$

$36a^2$

$54a^2$

23 The equation of a line is $y = 3x - 6$

Circle the coordinates of the y -intercept.

[1 mark]

$(0, -6)$

$(-6, 0)$

$(0, 3)$

$(3, 0)$



- 24 (a)** Work out $2.8^4 + \sqrt{158.76}$
Give your answer as a decimal.

[2 marks]

Answer _____

- 24 (b)** Work out $\frac{6.09 \times 10^{14}}{4.2 \times 10^9}$
Give your answer in standard form.

[2 marks]

Answer _____

- 25** A tank contains 40 litres of water.

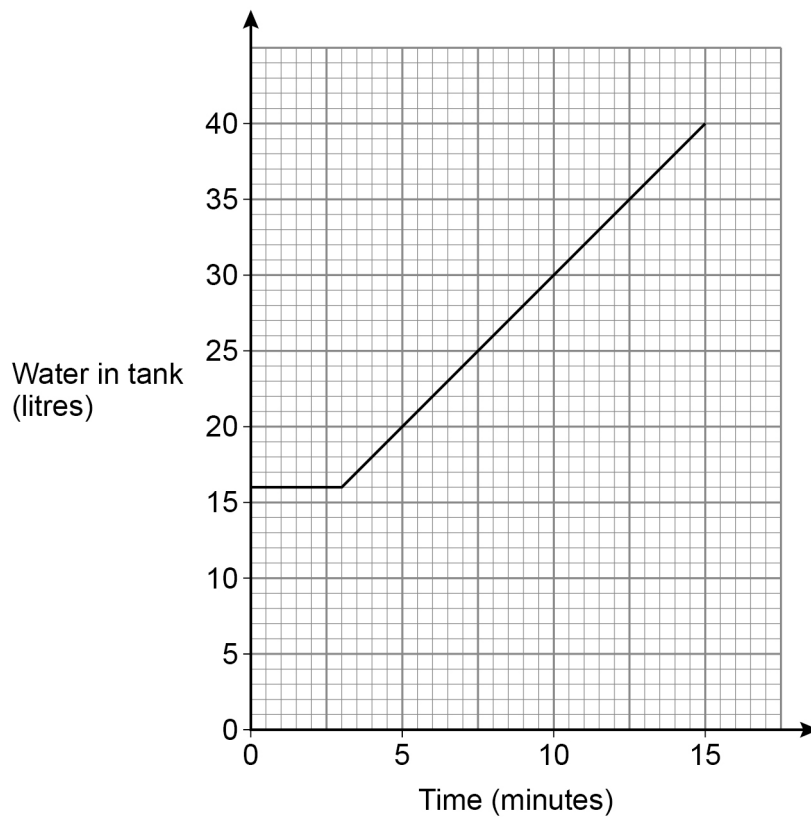
- 25 (a)** Water leaks out of the tank at a rate of 1.2 litres per minute.
The leak is stopped after 20 minutes.
Show that, when the leak is stopped, the tank contains 16 litres of water.

[1 mark]



25 (b)

The tank is refilled with water from a tap.

The graph shows the amount of water in the tank **after** the leak is stopped.

Complete this report by writing a number in each answer space.

[3 marks]**Report**

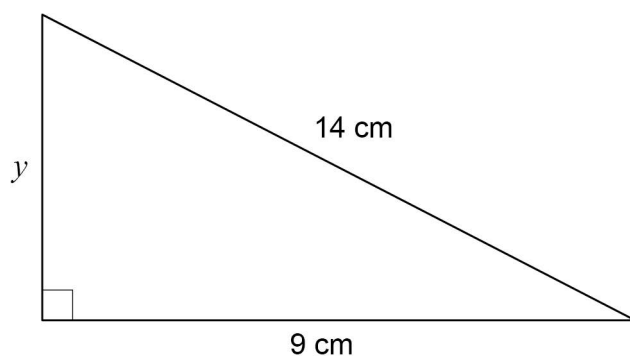
_____ minutes after the leak is stopped, the tap starts to refill the tank.

The rate at which the tank refills is _____ litres per minute.

Turn over ►

26

Here is a triangle.

Not drawn
accuratelyUse Pythagoras' theorem to work out the value of y .

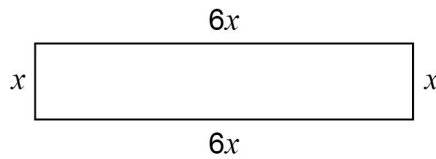
Give your answer as a decimal.

[3 marks]

 $y =$ _____ cm


27

The length of this rectangle is 6 times the width.



Not drawn
accurately

Two of these rectangles are joined, with no overlap, to make this L-shape.



Not drawn
accurately

The perimeter of the L-shape is 98.8 cm

Work out the value of the perimeter of **one** of the rectangles.

[4 marks]

Answer _____ cm

7

Turn over ►



28

Written as the product of prime factors,

$$12\,600 = 2^3 \times 3^2 \times 5^2 \times 7$$

and

$$14\,112 = 2^5 \times 3^2 \times 7^2$$

Work out the highest common factor (HCF) of 12 600 and 14 112

Give your answer as an integer.

[2 marks]

Answer _____

END OF QUESTIONS

There are no questions printed on this page

*Do not write
outside the
box*

**DO NOT WRITE ON THIS PAGE
ANSWER IN THE SPACES PROVIDED**

Find Personal Tutor from www.wisesprout.co.uk

找名校导师，用小草线上辅导（微信小程序同名）



[illegible]

[illegible]

[illegible]

[illegible]

There are no questions printed on this page

*Do not write
outside the
box*

**DO NOT WRITE ON THIS PAGE
ANSWER IN THE SPACES PROVIDED**

Copyright information

For confidentiality purposes, all acknowledgements of third-party copyright material are published in a separate booklet. This booklet is published after each live examination series and is available for free download from www.aqa.org.uk.

Permission to reproduce all copyright material has been applied for. In some cases, efforts to contact copyright-holders may have been unsuccessful and AQA will be happy to rectify any omissions of acknowledgements. If you have any queries please contact the Copyright Team.

Copyright © 2022 AQA and its licensors. All rights reserved.

Find Personal Tutor from www.wisesprout.co.uk

找名校导师，用小章线上辅导（微信小程序同名）

