

Please write clearly in block capitals.

Centre number

--	--	--	--	--

Candidate number

--	--	--	--

Surname

Forename(s)

Candidate signature

I declare this is my own work.

AS GEOGRAPHY

Paper 1 Physical Geography and People and the Environment

Tuesday 12 May 2020

Afternoon

Time allowed: 1 hour 30 minutes

Materials

For this paper you must have:

- a pencil
- a rubber
- a ruler.

You may use a calculator.

Instructions

- Use black ink or black ball-point pen.
- Fill in the boxes at the top of this page.
- Answer **either** Question 1 **or** Question 2 **or** Question 3 in Section A.
- Answer **either** Question 4 **or** Question 5 in Section B.
- You must answer the questions in the spaces provided. Do not write outside the box around each page or on blank pages.
- Do all rough work in this book. Cross through any work you do not want to be marked.

Information

- The marks for questions are shown in brackets.
- The total number of marks available for this paper is 80.

For Examiner's Use	
Section	Mark
A	
B	
TOTAL	




J U N 2 0 7 0 3 6 1 0 1

For the multiple-choice questions, completely fill in the circle alongside the appropriate answer.

CORRECT METHOD 

WRONG METHODS    

If you want to change your answer you must cross out your original answer as shown. 

If you wish to return to an answer previously crossed out, ring the answer you now wish to select as shown. 

Section A

Answer **one** question in this section.





Answer **either** Question 1 **or** Question 2 **or** Question 3.

Question 1 Water and carbon cycles

0 1 . 1

In systems in physical geography, which of the following correctly defines negative feedback?

[1 mark]

- A** Changes in a system amplify, or speed up, the impacts of an initial action. 
- B** Changes in a system decrease, or slow down, the impacts of an initial action. 
- C** When there is a balance between the inputs and outputs of a system. 
- D** When there is a transfer of energy beyond the boundary of the system. 



0 1 . 2 In the carbon cycle, which of these represents the process of respiration?

[1 mark]

A Carbohydrate + oxygen → carbon dioxide + water + energy

☐

B Carbon dioxide + water + sunlight → carbohydrate + oxygen + energy

☐

C Carbonic acid + calcium carbonate → calcium bicarbonate

☐

D Organic compounds → carbon dioxide + methane

☐

0 1 . 3 Outline the process of combustion in the carbon cycle.

[3 marks]

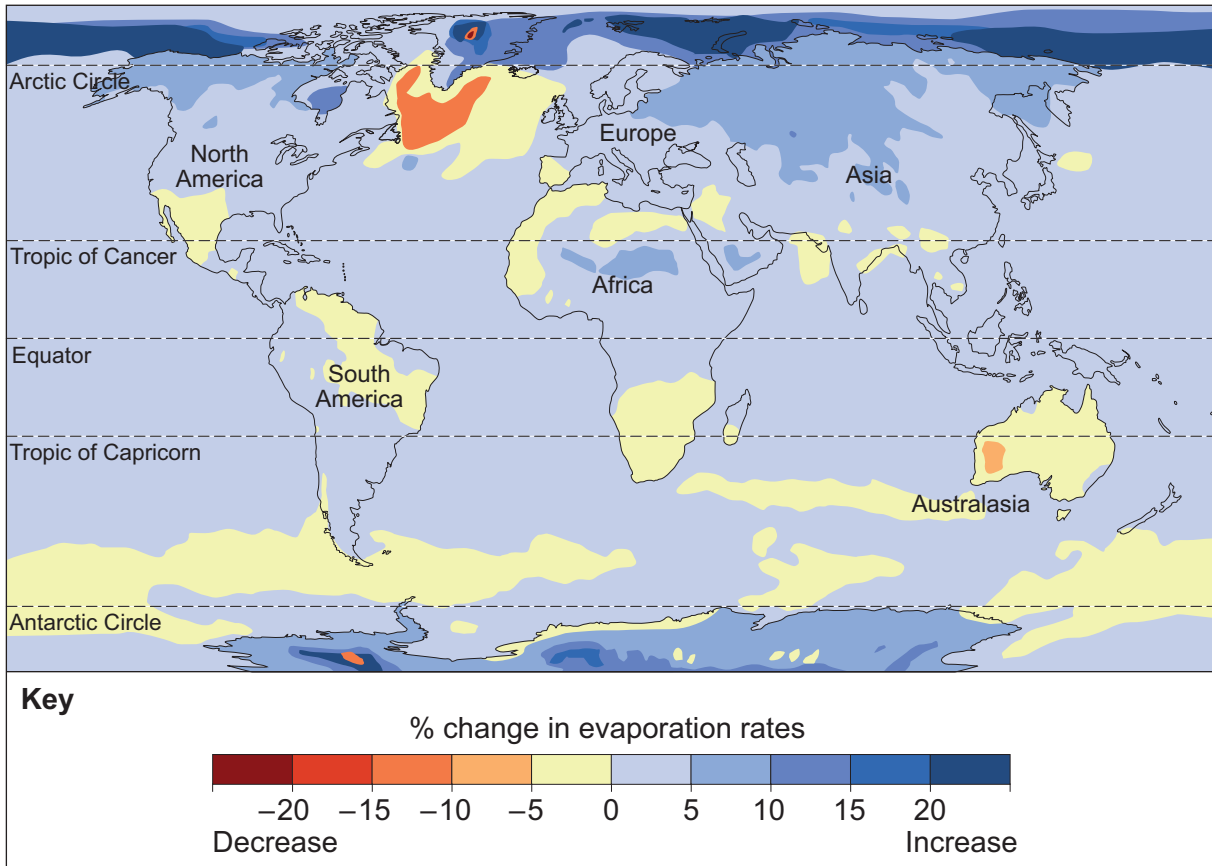
Question 1 continues on the next page

Turn over ►



Figure 1 shows information about predicted changes to the annual rate of evaporation from the surface of the Earth between 2016 and 2035.

Figure 1



0 1 . 4

Analyse the information shown in **Figure 1**.

[6 marks]



0	1	.	5
---	---	---	---

Assess the possible impact of changing land use on the shape of a flood hydrograph.

[9 marks]

Find Personal Tutor from www.wisesprout.co.uk

找名校导师，用小草线上辅导（微信小程序同名）

Question 1 continues on the next page

Turn over ►



‘Human activity has led to irreversible changes to the carbon cycle, causing negative impacts for life on Earth.’

[20 marks]

[illegible]

Turn over ►



40

End of Question 1

Question 2 Coastal systems and landscapes**0 2 . 1**

In systems in physical geography, which of the following correctly defines negative feedback?

[1 mark]

- A** Changes in a system amplify, or speed up, the impacts of an initial action.
- B** Changes in a system decrease, or slow down, the impacts of an initial action.
- C** When there is a balance between the inputs and outputs of a system.
- D** When there is a transfer of energy beyond the boundary of the system.

☐☐☐☐**0 2 . 2**

What is a spit?

[1 mark]

- A** A beach that is found higher than the current shoreline formed by a fall in sea level relative to the land.
- B** A gently sloping expanse of eroded rock at the base of a cliff formed by wave erosion.
- C** A horseshoe shaped feature on a beach composed of deposited sand and gravel with seaward facing points.
- D** A long narrow ridge of sand or shingle with one end connected to the shore and the other extending into the sea or estuary.

☐☐☐☐

Question 2 continues on the next page

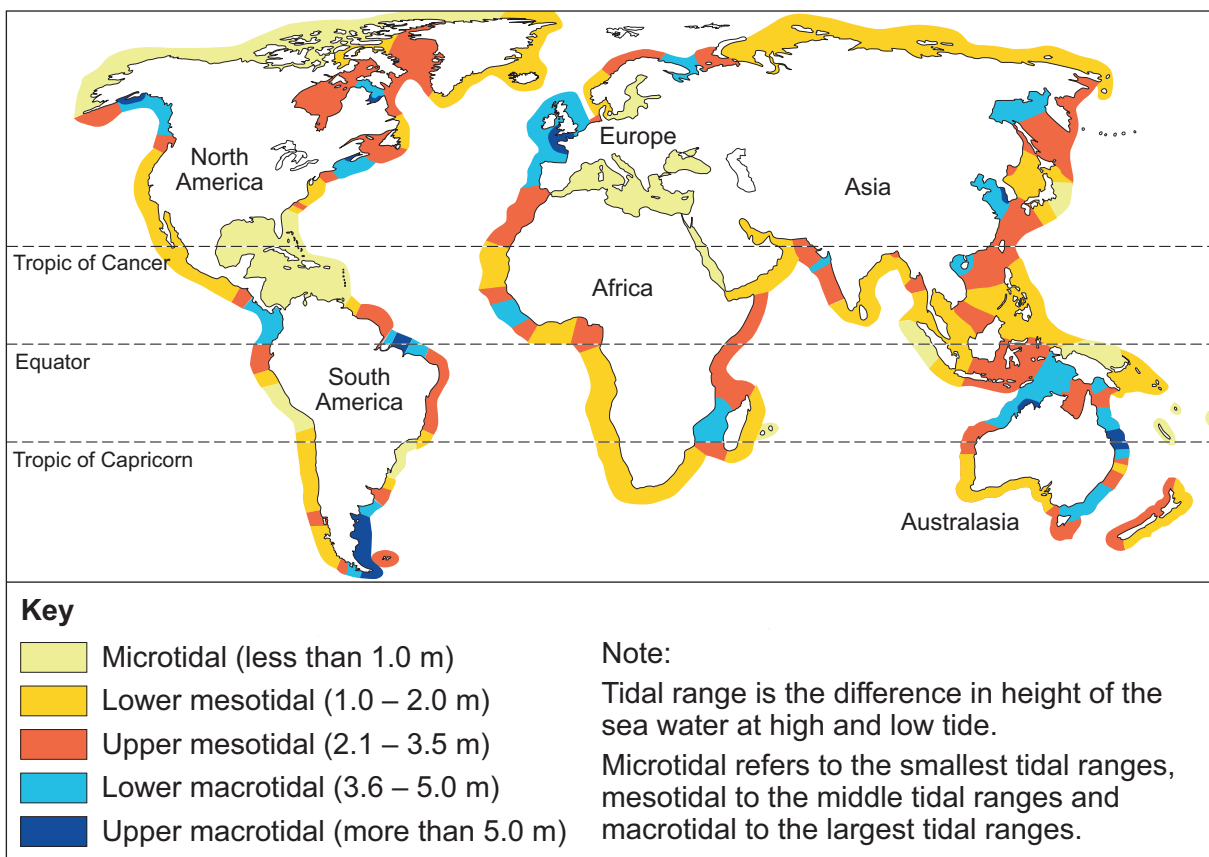
Turn over ►

0 2 . 3 Outline the process of coastal hydraulic action.

[3 marks]

Figure 2 shows information about tidal ranges at coasts around the world.

Figure 2



0	2	.	4
---	---	---	---

Analyse the information shown in **Figure 2**.

[6 marks]

This image shows a blank sheet of white paper with horizontal ruling lines. The lines are evenly spaced and run across the width of the page. There are no margins, text, or other markings on the paper.

Question 2 continues on the next page

Find Personal Tutor from www.wisesprout.co.uk

找名校导师，用小草线上辅导（微信小程序同名）

Turn over ►



How far do you agree that weathering processes make little contribution to the development of landscapes of coastal erosion?

[illegible]

With reference to a coastal landscape beyond the UK, assess the view that predicted climate change will only lead to negative impacts on the coastal area.

[illegible]

找名校导师，用小草线上辅导（微信小程序同名）

[illegible]

40

End of Question 2**Turn over ►**

Question 3 Glacial systems and landscapes**0 3 . 1**

In systems in physical geography, which of the following correctly defines negative feedback?

[1 mark]

- A** Changes in a system amplify, or speed up, the impacts of an initial action.
- B** Changes in a system decrease, or slow down, the impacts of an initial action.
- C** When there is a balance between the inputs and outputs of a system.
- D** When there is a transfer of energy beyond the boundary of the system.

☐☐☐☐**0 3 . 2**

What is a drumlin?

[1 mark]

- A** A curved ridge of deposited glacial debris dumped at the point of furthest extent of ice advance.
- B** A rock shaped by a glacier. It has a smooth gently sloping up-valley slope and a jagged steep down-valley side.
- C** An armchair shaped hollow on a mountainside, with a steep backwall, over-deepened base and a rock-lip on the down-valley side.
- D** An elongated small hill shaped by a glacier, with a tapered end pointing in the direction of ice movement.

☐☐☐☐

0	3	.	3
---	---	---	---

Explain why many cold environments are described as fragile environments.

[3 marks]

Question 3 continues on the next page**Turn over ►**

Figure 3 shows information about possible changes to permafrost by the year 2100.

Figure 3



[6 marks]

[illegible]

Find Personal Tutor from www.wisesprout.co.uk

找名校导师，用小草线上辅导（微信小程序同名）

'Climate is more important than soils in determining the characteristics of vegetation in cold environments.'

[9 marks]

[illegible]

Assess the view that predicted climate change will only lead to negative impacts on cold environments.

[illegible]

Find Personal Tutor from www.wisesprout.co.uk

找名校导师，用小草线上辅导（微信小程序同名）

Turn over ►



[illegible]

[illegible]

End of Section A

Turn over for Section B

Turn over ►



Section BAnswer **one** question in this section.Answer **either** Question 4 **or** Question 5.**Question 4 Hazards****0 4 . 1** What is tephra?**[1 mark]**

- A** Ash, dust and rock fragments ejected during a volcanic eruption.
- B** Destructive fast-flowing mudflows down the slopes of a volcano.
- C** Large waves generated by seismic activity.
- D** Rapidly moving clouds of hot ash, gas and lava erupted from a volcano.

☐☐☐☐**0 4 . 2** Which of the following describes a fatalistic attitude to natural hazards?**[1 mark]**

- A** Governments create regulations to ensure developers modify buildings to make them hazard resistant.
- B** Natural hazards create so much fear that residents move elsewhere to live.
- C** People accept the risk but choose to do nothing to reduce the risk from the natural hazard they face.
- D** People take actions to mitigate the impacts of the natural hazards they face.

☐☐☐☐

0	4	.	3
---	---	---	---

Outline conditions that may lead to intense wildfires.

[3 marks]

Question 4 continues on the next page**Turn over ►**

Figure 4 is taken from an internet article about the Loma Prieta earthquake that struck the San Francisco Bay Area in 1989. It is a recollection from a survivor writing in 2018.

Figure 4

Loma Prieta Earthquake Stories
cannot be reproduced here due to third-party copyright restrictions.



0	4	.	4
---	---	---	---

Using **Figure 4**, evaluate the usefulness of this qualitative source for understanding this event.

[6 marks]

Question 4 continues on the next page

Turn over ►



With reference to a recent tropical storm that you have studied, assess the extent to which the storm affected the character of a place.

[9 marks]

[illegible]

Assess the extent to which the nature of plate margins determines the impacts of earthquake events.

[illegible]

Find Personal Tutor from www.wisesprout.co.uk

找名校导师，用小草线上辅导（微信小程序同名）

Do not write
outside the
box

Find Personal Tutor from www.wisesprout.co.uk

找名校导师，用小草线上辅导（微信小程序同名）

Extra space



Do not write
outside the
box

Find Personal Tutor from www.wisesprout.co.uk 找名校导师，用小草线上辅导（微信小程序同名）

40

End of Question 4

Turn over ►



Question 5 Contemporary urban environments**0 5 . 1** What is deindustrialisation?**[1 mark]**

- A** A decline in the manufacturing sector as a proportion of the economy.
- B** The process where people and industry move towards the edge of urban areas.
- C** When governments attract foreign direct investment from large TNCs.
- D** Where affluent young people move into an area increasing property prices.

☐☐☐☐**0 5 . 2** Which of the following describes the concept of liveability?**[1 mark]**

- A** The changes experienced in western cities in the late twentieth century.
- B** The demands made on global natural resources by individuals or groups of people.
- C** The existing urban population lives without compromising the ability of future populations to live with the same quality of life.
- D** The quality of life is enhanced for people by good access to services which meet their needs.

☐☐☐☐

0	5	.	3
---	---	---	---

Outline the concept of urban resurgence.

[3 marks]

Question 5 continues on the next page**Turn over ►**

Figure 5 is an internet article about the city of Miami in Florida.

Figure 5

Miami is a Walk on the Vibrant Side of Cultural Diversity
cannot be reproduced here due to third-party copyright restrictions.



0 5 . 4

Using **Figure 5**, evaluate the usefulness of this qualitative source for understanding this place.

[6 marks]

Question 5 continues on the next page

Turn over ►

Do not write
outside the
box

0 5 . 5

Evaluate how lived experience of place may have changed in a gentrified area.

[9 marks]

Find Personal Tutor from www.wisesprout.co.uk 找名校导师，用小程序线上辅导（微信小程序同名）



With reference to contrasting urban areas, evaluate the relative success of strategies used to address issues associated with economic inequality.

[illegible]

找名校导师，用小草线上辅导（微信小程序同名）

Extra space _____



Do not write
outside the
box

END OF QUESTIONS



There are no questions printed on this page

*Do not write
outside the
box*

**DO NOT WRITE ON THIS PAGE
ANSWER IN THE SPACES PROVIDED**

Find Personal Tutor from www.wisesprout.co.uk

找名校导师，用小草线上辅导（微信小程序同名）

Copyright information

For confidentiality purposes, all acknowledgements of third-party copyright material are published in a separate booklet. This booklet is published after each live examination series and is available for free download from www.aqa.org.uk.

Permission to reproduce all copyright material has been applied for. In some cases, efforts to contact copyright-holders may have been unsuccessful and AQA will be happy to rectify any omissions of acknowledgements. If you have any queries please contact the Copyright Team.

Copyright © 2020 AQA and its licensors. All rights reserved.



4 0



2 0 6 A 7 0 3 6 / 1

G/Jun20/7036/1